























ADI-SOYADI:

Onluk bozarak çıkarma işlemi alıştırmaları

2.SINIF

MATEMATİK

Arıların hangi çiçeğe konması gerektiğini işlemleri yaparak bul ve ikisini de aynı renge boy.


$$\begin{array}{r} 43 \\ - 15 \\ \hline \end{array}$$

$$\begin{array}{r} 62 \\ - 24 \\ \hline \end{array}$$

$$\begin{array}{r} 36 \\ - 27 \\ \hline \end{array}$$

$$\begin{array}{r} 92 \\ - 39 \\ \hline \end{array}$$

$$\begin{array}{r} 73 \\ - 28 \\ \hline \end{array}$$

$$\begin{array}{r} 43 \\ - 34 \\ \hline \end{array}$$

$$\begin{array}{r} 54 \\ - 28 \\ \hline \end{array}$$

$$\begin{array}{r} 75 \\ - 28 \\ \hline \end{array}$$

$$\begin{array}{r} 70 \\ - 14 \\ \hline \end{array}$$

$$\begin{array}{r} 90 \\ - 15 \\ \hline \end{array}$$


Veli:.....

Öğretmen:.....