



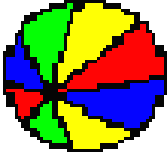



## GEOMETRİK CİSİMLER


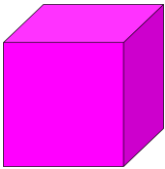
1. Aşağıdaki resimlerden hangileri  şekline benziyor? Yuvarlak içine alınız.



2. Aşağıdaki resimlerden hangileri  şekline benziyor? Yuvarlak içine alınız.



3. Aşağıdaki resimlerden hangileri  şekline benziyor? Yuvarlak içine alınız.



SERKAN ASLAN